

Year 1


Can I find number bonds to 10?

Look at the 10 penguins below. There are 7 blue and 3 yellow penguins.



$$7 + 3 = 10$$

Write the total number of blue squares in the blue box and the total number of yellow squares in the yellow box below to complete the number sentence.



$$\square + \square = 10$$



$$\square + \square = 10$$

Year 1

Can I find number bonds to 10?

Colour some squares in blue and some in yellow. Make sure all the squares have been coloured in. Write the total number of blue squares in the blue box and the total number of yellow squares in the yellow box to find number bonds to ten and complete the number sentences below.



$$\square + \square = 10$$



$$\square + \square =$$





$$\square + \square =$$



Year 1

Can I find number bonds to 10?



--	--	--	--	--	--	--	--	--	--

	+		=
---	---	---	---

--	--	--	--	--	--	--	--	--	--

	+		=
---	---	---	---

--	--	--	--	--	--	--	--	--	--

	+		=
---	---	---	---