



LI: Can I write the corresponding sum to a word problem and find the answer?

If you had 6 bananas and 4 oranges, how many pieces of fruit would you have altogether?



If you have 10 dojo points and your teacher gives you 12 more, how many dojo points do you have now?




If you have 7 cherry cakes and 7 sprinkle cakes, how many cakes do you have altogether?



If you have 21 rainbow stickers and 7 rocket stickers, how many do you have in total?



On Monday I saw 2 cats, on Tuesday I saw 5 cats, on Wednesday I saw 7 cats. How many cats did I see in total?



There are 4 children on the bus, 9 more children get on the bus at bus stop A, 5 more children get on the bus at bus stop B. How many children are there on the bus?

