
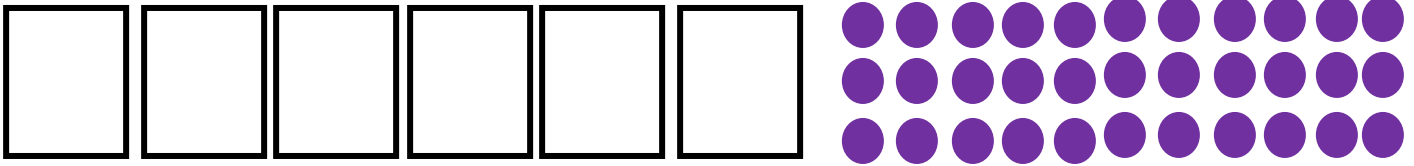


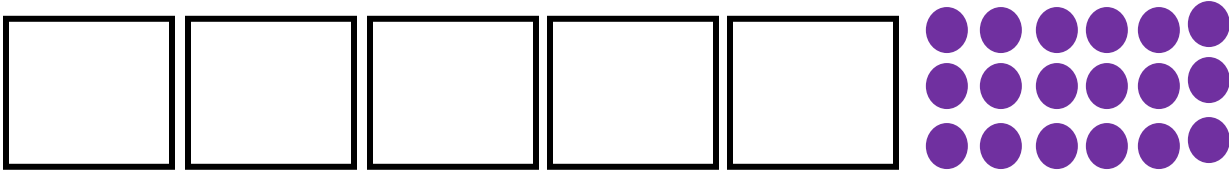
1. I have 20 counters to put in my 3 pots. How many counters will be in each pot?



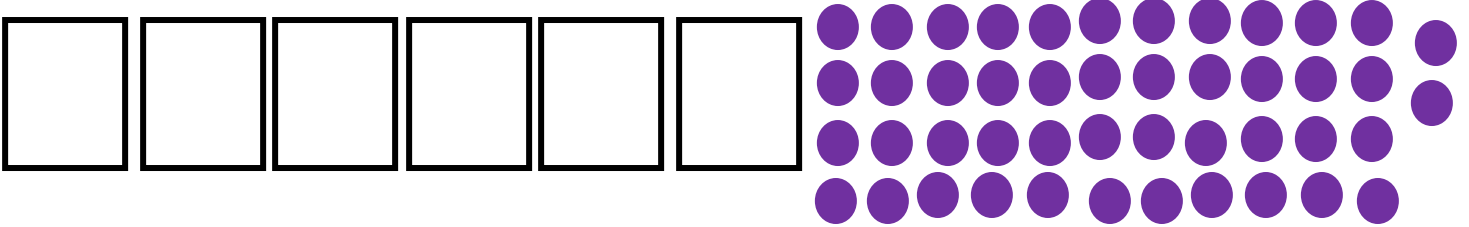
2. I have 33 counters to put in my 6 pots. How many counters will be in each pot?



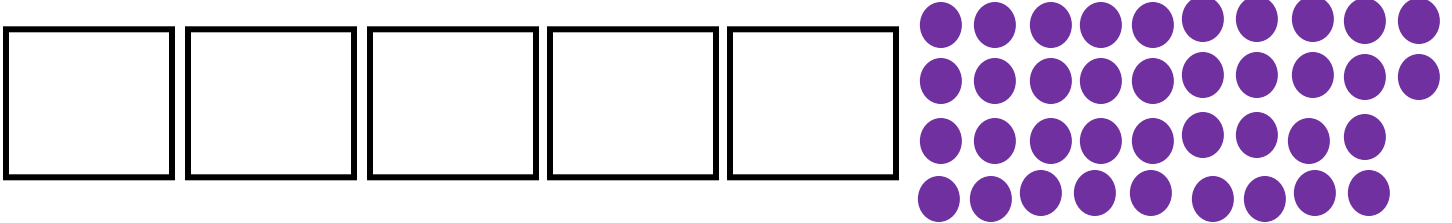
3. I have 18 counters to put in my 5 pots. How many counters will be in each pot?




4. I have 46 counters to put in my 6 pots. How many counters will be in each pot?



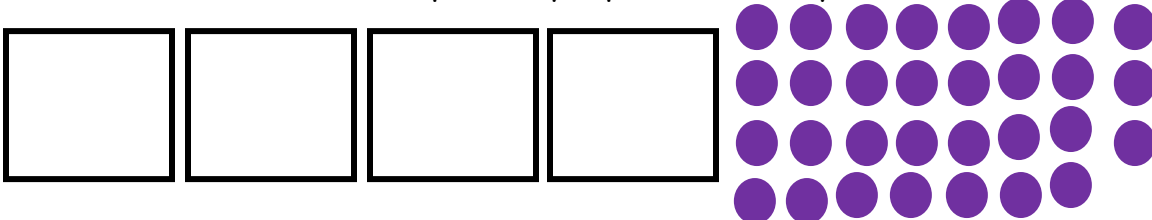
5. I have 38 counters to put in my 5 pots. How many counters will be in each pot?



6. I have 25 counters to put in my 3 pots. How many counters will be in each pot?



7. I have 31 counters to put in my 4 pots. How many counters will be in each pot?



Answers:

1. $6r^2$
2. $5r^3$
3. $3r^3$
4. $7r^4$
5. $7r^3$
6. $8r^1$
7. $7r^3$