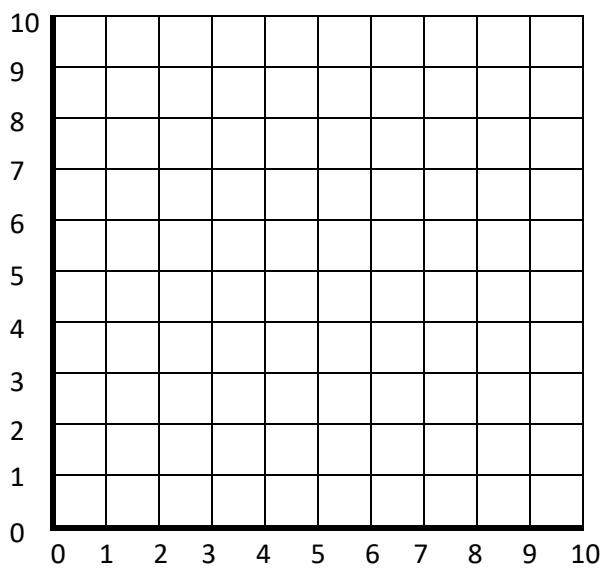
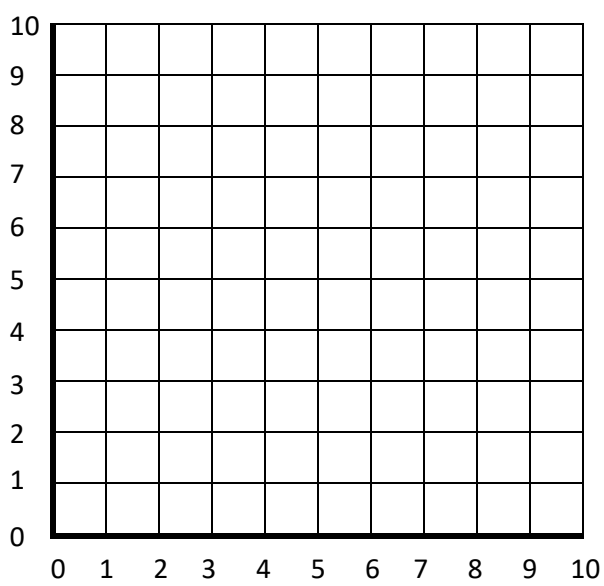


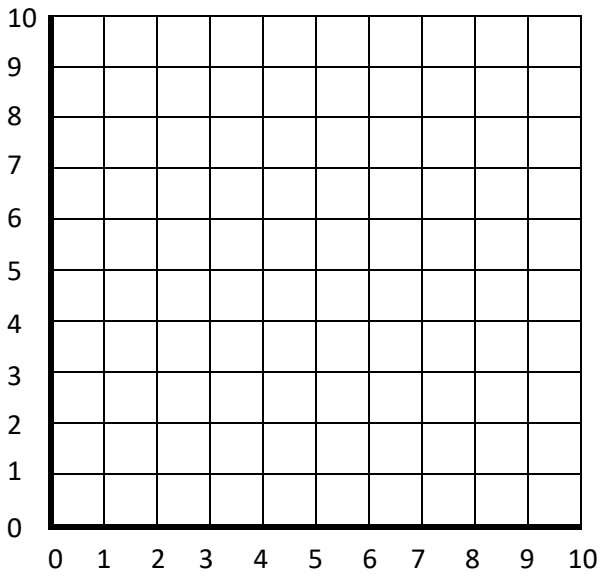
$A = (5,4)$ $B = (5,8)$ $C = (9,4)$ $D = (9,8)$



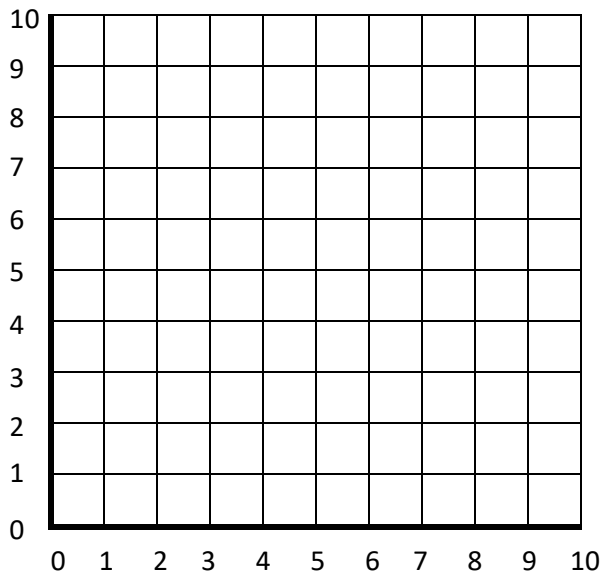
$A = (0,2)$ $B = (0,6)$ $C = (9,2)$ $D = (9,6)$



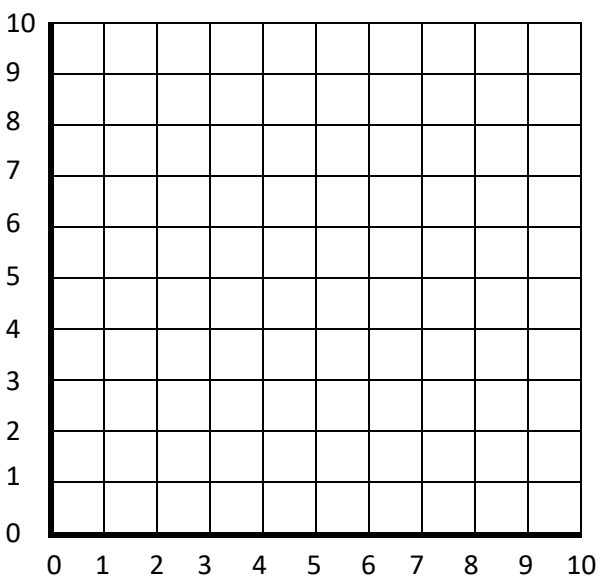
$A = (2,9)$ $B = (1,2)$ $C = (10,2)$



$A = (1,1)$ $B = (10,1)$ $C = (8,10)$ $D = (3,10)$



$A = (0,8)$ $B = (5,8)$ $C = (10,3)$ $D = (5,3)$



$A = (1,5)$ $B = (3,1)$ $C = (7,1)$ $D = (9,5)$
 $E = (7,9)$ $F = (3,9)$