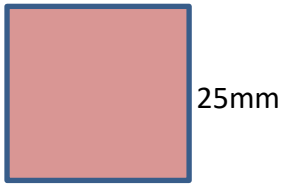
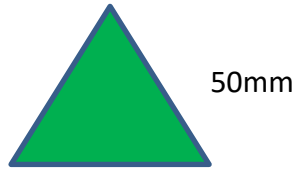


Perimeter of regular shapes.

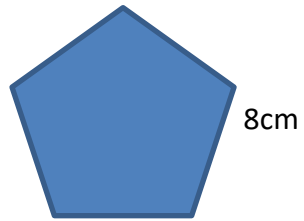
Can you work out the perimeter of these **regular** shapes?



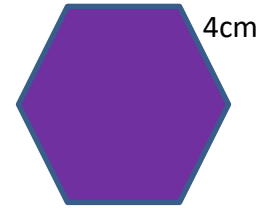
Perimeter = _____



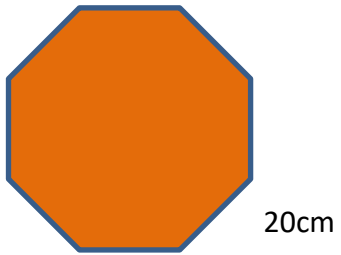
Perimeter = _____



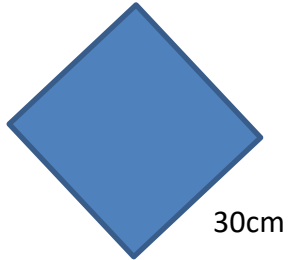
Perimeter = _____



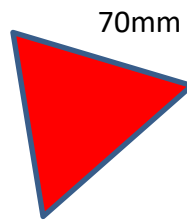
Perimeter = _____



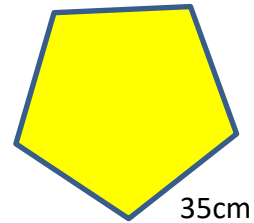
Perimeter = _____



Perimeter = _____



Perimeter = _____



Perimeter = _____