



Perimeter of regular shapes.

Can you work out the perimeter of these **regular** shapes?




525mm

Perimeter = _____



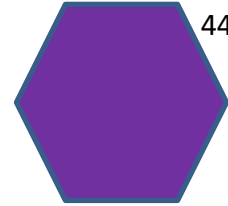
250mm

Perimeter = _____




28cm

Perimeter = _____



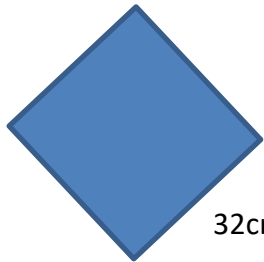
44cm

Perimeter = _____



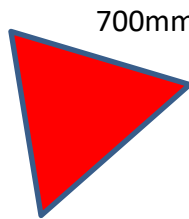
20cm

Perimeter = _____



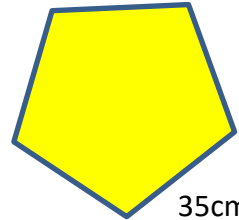
32cm

Perimeter = _____



700mm

Perimeter = _____



35cm

Perimeter = _____