



Perimeter of regular shapes.

Can you work out the perimeter of these regular shapes?




514.5mm

Perimeter = _____



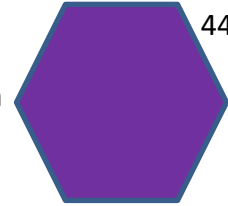
25.7cm

Perimeter = _____




283mm

Perimeter = _____



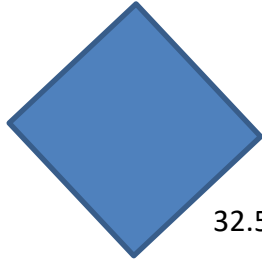
44.2cm

Perimeter = _____




120cm

Perimeter = _____



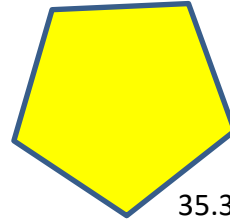
32.5cm

Perimeter = _____



70.45mm

Perimeter = _____



35.3cm

Perimeter = _____